

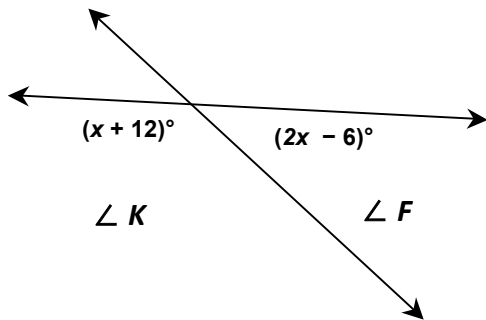
Name: _____ Date: _____ Period: _____

Homework #1

Find the measure of $\angle K$ and $\angle F$.

Show your work.

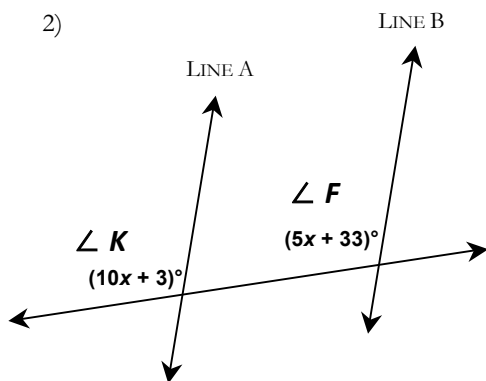
1)



$$\angle K = \underline{\hspace{2cm}}$$

$$\angle F = \underline{\hspace{2cm}}$$

2)

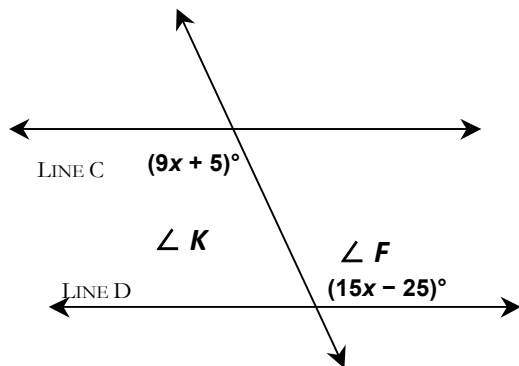


Line A and Line B are parallel.

$$\angle K = \underline{\hspace{2cm}}$$

$$\angle F = \underline{\hspace{2cm}}$$

3)



Line C and Line D are parallel.

$$\angle K = \underline{\hspace{2cm}}$$

$$\angle F = \underline{\hspace{2cm}}$$